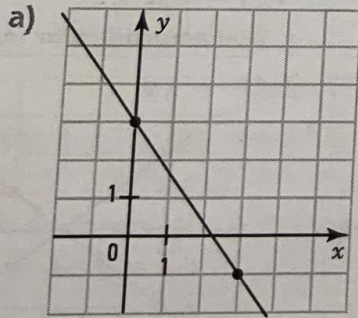
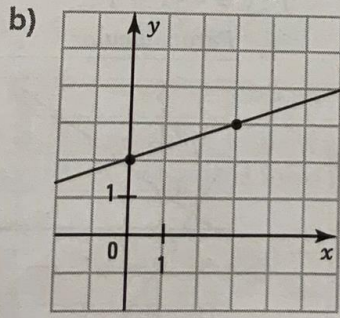


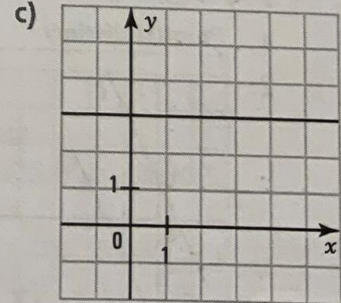
5. For each of the following lines, determine the slope, y-intercept and the functional equation.



$$y = -\frac{4}{3}x + 3$$



$$y = \frac{1}{3}x + 2$$



$$y = 0x + 3$$

